



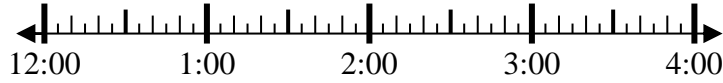
Solve each problem.

Answers

1) Start: 12:15

Elapsed: 1 hr & 35 mins

End: _____

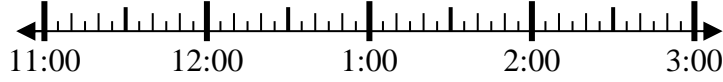


1. _____

2) Start: 11:30

Elapsed: 1 hr & 25 mins

End: _____

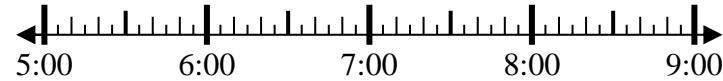


2. _____

3) Start: 5:10

Elapsed: 1 hr & 35 mins

End: _____

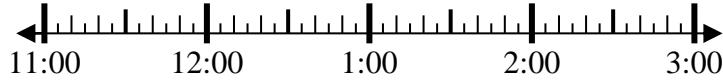


3. _____

4) Start: 11:00

Elapsed: 1 hr & 10 mins

End: _____



4. _____

5) Start: 12:30

Elapsed: 1 hr & 10 mins

End: _____



5. _____

6) Start: 12:40

Elapsed: 1 hr & 25 mins

End: _____

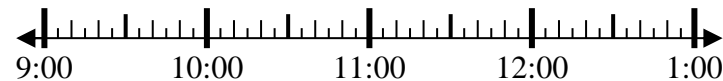


6. _____

7) Start: 9:40

Elapsed: 1 hr & 50 mins

End: _____



7. _____

8) Start: 1:35

Elapsed: 2 hrs & 45 mins

End: _____



8. _____



Solve each problem.

1) Start: 12:15

Elapsed: 1 hr & 35 mins

End: 1:50



2) Start: 11:30

Elapsed: 1 hr & 25 mins

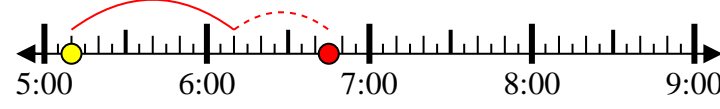
End: 12:55



3) Start: 5:10

Elapsed: 1 hr & 35 mins

End: 6:45



4) Start: 11:00

Elapsed: 1 hr & 10 mins

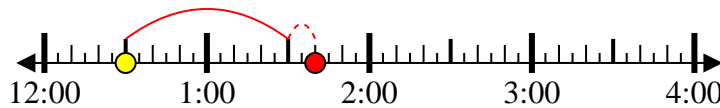
End: 12:10



5) Start: 12:30

Elapsed: 1 hr & 10 mins

End: 1:40



6) Start: 12:40

Elapsed: 1 hr & 25 mins

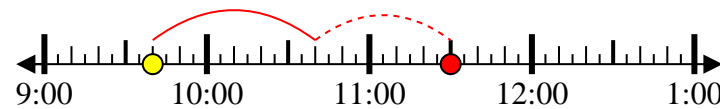
End: 2:05



7) Start: 9:40

Elapsed: 1 hr & 50 mins

End: 11:30



8) Start: 1:35

Elapsed: 2 hrs & 45 mins

End: 4:20



Answers

1. 1:50

2. 12:55

3. 6:45

4. 12:10

5. 1:40

6. 2:05

7. 11:30

8. 4:20